
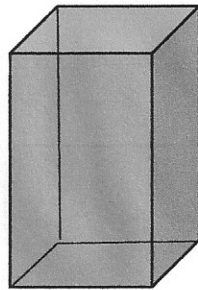
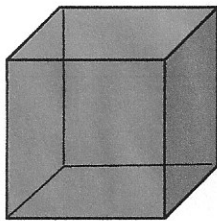


Mathe M7 - Geometrische Körper

1. Wie heißen diese geometrischen Körper?
2. Zähle die Ecken, Flächen und Kanten jedes Körpers?
3. Finde und schreibe Gegenstände auf, die aussieht wie eine geometrische Figur

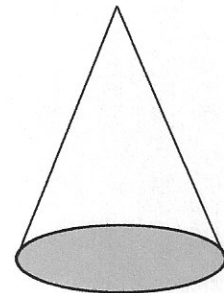
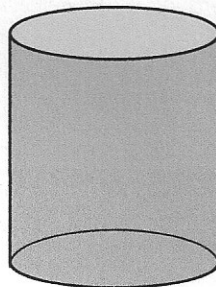
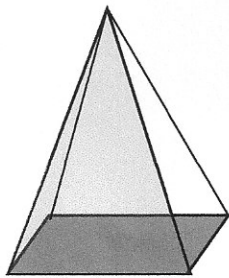
Pyramide Kugel Quader Würfel Kegel Zylinder



Name:	
Ecken:	
Flächen:	
Kanten:	

Name:	
Ecken:	
Flächen:	
Kanten:	

Name:	
Ecken:	
Flächen:	
Kanten:	



Name:	
Ecken:	
Flächen:	
Kanten:	

Name:	
Ecken:	
Flächen:	
Kanten:	

Name:	
Ecken:	
Flächen:	
Kanten:	

Gegenstände (z.B.: Fußball = Kugel)

1. _____

2. _____

3. _____

4. _____

5. _____

6. _____

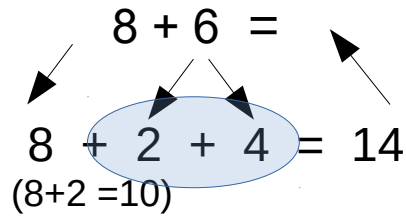
7. _____

8. _____

9. _____

Mathe M8

Addition mit Zehnerüberschreitung



1.) $9 + 7 = \underline{\quad}$
 $\underline{\quad} + \underline{\quad} + \underline{\quad} = \underline{\quad}$

2.) $5 + 8 = \underline{\quad}$
 $\underline{\quad} + \underline{\quad} + \underline{\quad} = \underline{\quad}$

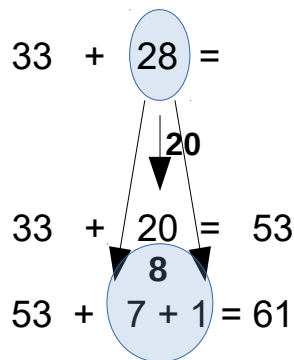
3.) $8 + 6 = \underline{\quad}$
 $\underline{\quad} + \underline{\quad} + \underline{\quad} = \underline{\quad}$

4.) $3 + 9 = \underline{\quad}$
 $\underline{\quad} + \underline{\quad} + \underline{\quad} = \underline{\quad}$

5.) $14 + 8 = \underline{\quad}$
 $\underline{\quad} + \underline{\quad} + \underline{\quad} = \underline{\quad}$

6.) $33 + 8 = \underline{\quad}$
 $\underline{\quad} + \underline{\quad} + \underline{\quad} = \underline{\quad}$

Für Profis

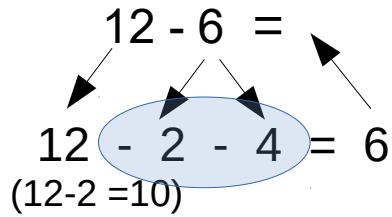


7.) $38 + 25 = \underline{\quad}$
 $\underline{\quad} + \underline{\quad} = \underline{\quad}$
 $\underline{\quad} + \underline{\quad} + \underline{\quad} = \underline{\quad}$

8.) $44 + 38 = \underline{\quad}$
 $\underline{\quad} + \underline{\quad} = \underline{\quad}$
 $\underline{\quad} + \underline{\quad} + \underline{\quad} = \underline{\quad}$

Mathe M9

Subtraktion mit Zehnerunterschreitung



1.) $14 - 7 =$ _____
_____ - _____ - _____ = _____

2.) $16 - 8 =$ _____
_____ - _____ - _____ = _____

3.) $15 - 6 =$ _____
_____ - _____ - _____ = _____

4.) $17 - 9 =$ _____
_____ - _____ - _____ = _____

3.) $23 - 9 =$ _____
_____ - _____ - _____ = _____

4.) $44 - 8 =$ _____
_____ - _____ - _____ = _____

Für Profis

7.) $35 - 28 =$ _____
_____ - _____ = _____
_____ - _____ - _____ = _____

8.) $66 - 18 =$ _____
_____ - _____ = _____
_____ - _____ - _____ = _____